

Glencoe Geometry Ch 7 Test Form B

NAME _____ DATE _____ PERIOD _____

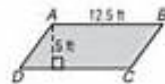
11 Chapter 11 Test, Form 1

SCORE _____

Write the letter for the correct answer in the blank at the right of each question.

1. Find the area of parallelogram $ABCD$. Round to the nearest tenth.

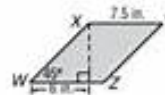
A. 17.5 ft^2 C. 35 ft^2
 B. 31.25 ft^2 D. 62.5 ft^2



1. _____

2. Find the area of parallelogram $WXYZ$. Round to the nearest tenth.

F. 27 in^2 H. 63.6 in^2
 G. 45 in^2 J. 81 in^2



2. _____

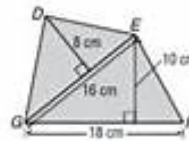
3. What is the best classification of quadrilateral $PQRS$ with vertices $P(2, 2)$, $Q(-1, 2)$, $R(-1, -3)$, and $S(2, -3)$?

A. square C. parallelogram
 B. rectangle D. none of these

3. _____

4. Find the area of quadrilateral $DEFG$.

F. 154 cm^2 H. 244 cm^2
 G. 218 cm^2 J. 308 cm^2



4. _____

5. Find the area of trapezoid $ABCD$ with vertices $A(1, -2)$, $B(5, -2)$, $C(4, 4)$, and $D(1, 4)$.

A. 6.5 units^2 C. 21 units^2
 B. 14 units^2 D. 36 units^2

5. _____

6. Find the area of rhombus $ABCD$ with vertices $A(-1, 3)$, $B(3, 0)$, $C(-1, -3)$, and $D(-5, 0)$.

F. 8 units^2 H. 26 units^2
 G. 24 units^2 J. 32 units^2

6. _____

7. Find the area of a regular octagon with a perimeter of 96 centimeters.

A. about 695.3 cm^2 C. about 532 cm^2
 B. about 576 cm^2 D. about 119.3 cm^2

7. _____

8. Find the area of an equilateral triangle with a side length of 14 inches.

F. about 12.1 in^2 H. about 84.9 in^2
 G. about 42 in^2 J. about 254.6 in^2

8. _____

9. Find the area of a circle with a circumference of 20π .

A. 400π C. 200π
 B. 314π D. 100π

9. _____

Copyright © Glencoe/McGraw-Hill, a division of The McGraw-Hill Companies, Inc.

Assessment

[DOWNLOAD] Glencoe Geometry Ch 7 Test Form B. math worksheet glencoe science worksheets answers for education geometry workbook answer key chapter 8 resource masters books and stuff pdf index of wp content ... Glencoe Geometry Worksheets Answer Key Lbartmancom

[PDF EBOOKS] Glencoe Geometry Ch 7 Test Form B. Book file PDF easily for everyone and every device. You can download and read online Glencoe Geometry Ch 7 Test Form B file PDF Book only if you are registered here. And also You can download or read online all Book PDF file that related with Glencoe Geometry Ch 7 Test Form B book. Happy reading Glencoe Geometry Ch 7 Test Form B Book everyone. Download file Free Book PDF Glencoe Geometry Ch 7 Test Form B at Complete PDF Library. This Book have some digital formats such us : paperbook, ebook, kindle, epub, and another formats. Here is The Complete PDF Book Library. It's free to register here to get Book file PDF Glencoe Geometry Ch 7 Test Form B.

What Are Leukocytes? Definition, Types Amp Function

Types. There are five different leukocytes that accomplish specific tasks based on their abilities and the type of invaders they are fighting. They are called neutrophils, basophils, eosinophils ...

Httpsconnectedmcgrawhillcom

We would like to show you a description here but the site won't allow us.

Overview Of The Basic Shapes In Geometry Video Amp Lesson

Watch this video lesson to learn about some basic shapes in geometry. These are the shapes that you will come across most often in math. Watch as triangles, rectangles, pentagons, and circles come ...

Standard Form Calculator Solve Algebra Problems With The

Please use this form if you would like to have this math solver on your website, free of charge. Name:

Comprehensive NCLEX Questions Most Like The NCLEX

Delegation strategies for the NCLEX, Prioritization for the NCLEX, Infection Control for the NCLEX, FREE resources for the NCLEX, FREE NCLEX Quizzes for the NCLEX, FREE NCLEX exams for the NCLEX, Failed the NCLEX - Help is here

19 TAC Chapter 112, Subchapter C Texas Education Agency

112.31. Implementation of Texas Essential Knowledge and Skills for Science, High School. (a) The provisions of this subchapter shall be implemented by school districts.

BibMe Free Bibliography Amp Citation Maker MLA, APA

